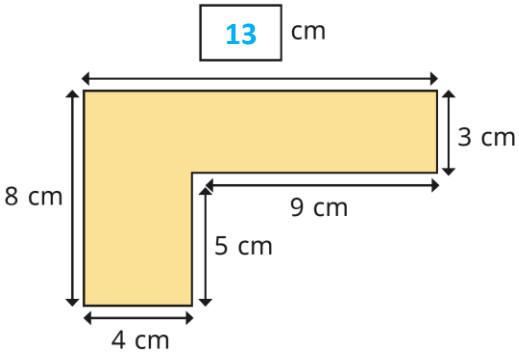
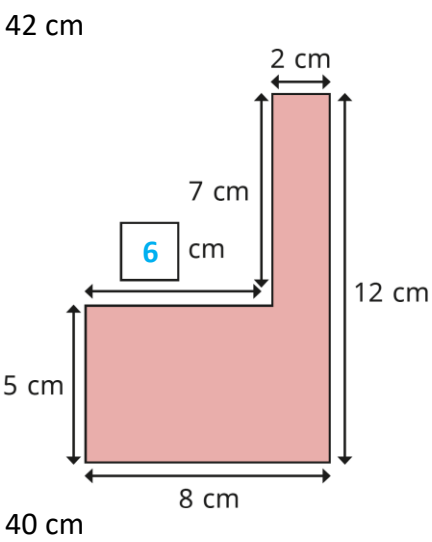
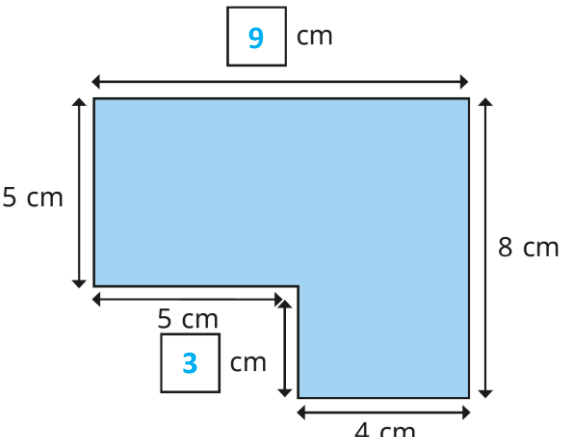


Question	Answer
1	<p>a)</p>  <p>b)</p>  <p>42 cm</p>
2	<p>a)</p>  <p>b) 34 cm</p>
3	<p>a) 36 cm</p> <p>b) 34 cm</p>
4	<p>a) No</p> <p>26 cm</p> <p>b) 22 cm      26 cm</p>

**Y4 – Spring – Block 2 – Step 7 – Find missing lengths in rectilinear shapes Answers (continued)**

Question	Answer
5	No The two horizontal unknown sides together are 12 cm. The two vertical unknown sides together are 10 cm. So the perimeter is 44 cm.
6	a) 16 m b) 24 m